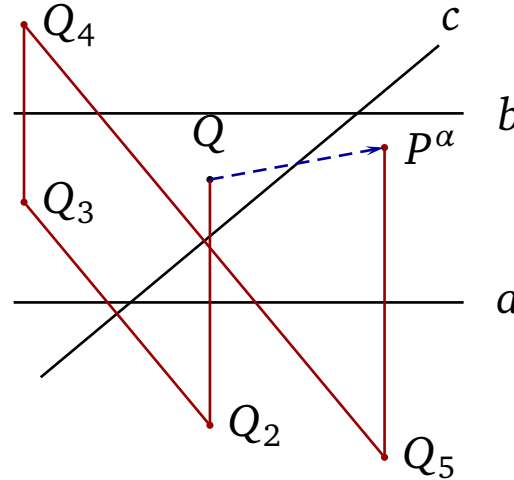
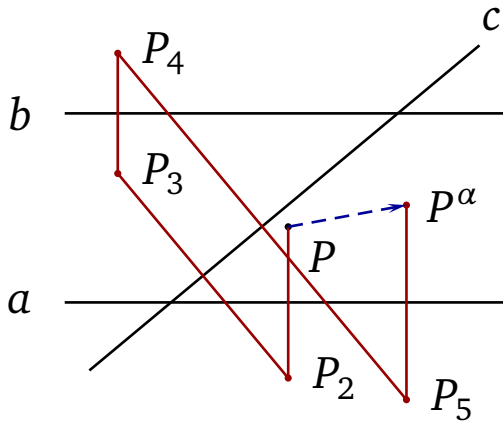
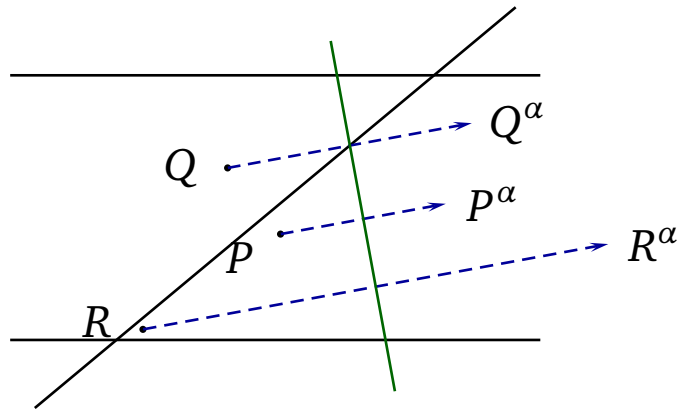


ESIMERKKI: $\alpha = \rho_a \rho_c \rho_b \rho_c \rho_a$



- α kääntää suunnan (5 peilausta).
- Joko peilaus tai siirtopeilaus.
- Mutta kumpi?

Kolmen pisteen sääntö kertoo, että se on **peilaus**:



NELIÖ: $\alpha = \rho_d \rho_b \rho_c \rho_a$

